

ST. ANDREWS SCOTS SCHOOL

Adjacent Navniti Apartment, I.P. Extension,
Delhi – 110092

Summer Holiday Homework

Session: 2026-2027

Class: VII



Dear Parents,

Summer vacation is here! It's a great time for students to relax, recharge, and explore new interests. Here are some valuable tips to make the most of this break:

TIPS FOR A FRUITFUL SUMMER VACATION

1. **Family Bonding:** Have at least two meals together with your children to strengthen your bond and create memories.
2. **Appreciate Farmers' Hard Work:** Teach your kids to respect farmers' efforts and avoid wasting food.
3. **Nurture Interests:** Encourage your child's passions, whether it's art, music, dance, or something else.
4. **Improve English Skills:** Practice conversing in English with your child to enhance their language skills.
5. **Share Family History:** Tell stories about your childhood and family history to help your child connect with their roots.

Summer Vacation Details

- **Dates: May 15, 2026 to June 30, 2026**
- **School reopens: July 1, 2026**

Productive Activities

- Summer camps
- Swimming
- Boxing
- Chess
- Drawing
- Singing
- Dancing
- Reading

Remember to Stay Healthy

- Drink plenty of water
- Eat nutritious homemade food
- Take breaks and relax

Make the most of this summer vacation and create lifelong memories with your children! ☺

BOOKS ARE MY BEST FRIENDS

D.E.A.R (Drop Everything and Read) TIME

Reading books is a virtue and it must be imbibed in the children right at an early age. Reading ignites creativity, sparks curiosity, and stimulates the imagination in young children. Thus, there is a need to create an enabling environment in which students read for pleasure.

SUBJECT WISE HOMEWORK

ENGLISH


1. Pick out any two words from the newspaper everyday. Write their meanings and make sentences of your own in separate notebook.

2. Prepare an English working model/project on the following topics:

a) Parts of Speech (ROLL NO.1 to 15)

b) Tenses Wheel (ROLL NO.16 to 30)

c) Punctuation City (ROLL NO.31 onwards)



3. Cut and paste pictures or words showing different types of sentences (declarative, interrogative, imperative, and exclamatory) on an A3 size sheet or in a scrapbook. Write one example sentence under each category and decorate the sheet creatively.

4. Revise and learn the syllabus covered till now.

5. Do the following worksheets in your English notebooks.

LITERATURE

A. Read these lines and answer the given questions:-

1. "My tonsils are as big as rocks."

a) Who is the speaker of these words?

b) Identify the figure of speech in the sentence.

2. "Sleeping beside his granny again!"

a) Who said this?

b) Why did he say it ?

c) How was the speaker feeling?

B. State whether true or false for the following statement:-

1. Swami helped catch a well-known house thief.

2. Dr Mortimer was Charles Baskerville's friend.

3. Sherlock Holmes shot the hound dead.
4. Swami had always slept next to his granny.
5. The hound was coal-black in colour.

GRAMMAR

Q1. You visited your grandparents during the holidays and spent a wonderful day with them. Write a diary entry describing your experience, feelings, and memorable moments.

Q2. Identify whether the following groups of words are Sentences or Phrases:

1. The birds are flying in the sky.
2. Under the green tree
3. My best friend lives nearby.
4. In the middle of the road
5. The children played happily.
6. After the heavy rainfall
7. We visited the museum yesterday.
8. Across the river
9. The cat slept on the sofa.
10. During the summer vacation.

Q3. Fill in the blanks with suitable pronouns:

1. Riya is my friend. _____ is very kind.
2. Aman and I are classmates. _____ study together.
3. The dog is hungry. Please feed _____.
4. My parents are teachers. _____ work in the same school.
5. I have a new pen. _____ writes very smoothly.
6. Rahul is absent because _____ is ill.
7. Neha and Simran are dancing. _____ are performing on stage.
8. This gift is for Reena. Give it to _____.
9. My brother and I love cricket. _____ play every evening.
10. The children are in the park. _____ are playing football.

SCIENCE

Instructions:

- Do all the holiday homework questions in the activity file.
- Complete your science Q/A and worksheets and learn it.
- Revise PA 1 syllabus.

Q.1. Write a short biography on **Acharya Prafulla Chandra Ray** and highlight his contributions in the field of Modern Indian Chemistry.

Q.2. Read the passage and answer the given questions.

Nitesh was playing with his friends in the garden. Suddenly, Nitesh was stung by a honeybee and was in great pain. Immediately, his friends call his mother. She applied baking soda solution on the affected area and then took him to the doctor.

Read the above passage and answer the following questions:

- (a) What could be the reason for this burning pain?
- (b) Why did his mother applied baking soda solution on the affected area?
- (c) What values are shown by Nitesh's friends?

Q3. To create a gratitude card using simple electrical components and express thankfulness to a family member through a glowing message.

Materials Required:

- * Coloured chart paper or cardboard
- * LED bulb
- * Coin cell/battery
- * Connecting wires
- * Transparent tape
- * Glue or Fevicol
- * Scissors
- * Sketch pens/markers
- * Decorative items (stickers, glitter, ribbons, etc.)
- * Switch (optional)

Procedure:

1. Fold the chart paper to make a greeting card.
2. Decide the message you want to write for a family member (for example: "Thank you, Mom, for your love and care").
3. Make small holes where you want the LED light to appear.
4. Fix the LED bulb carefully behind the card.
5. Connect the LED to the battery using wires to complete the circuit.
6. Use tape to secure the wires and battery properly.
7. Test the circuit to ensure the LED glows when connected.
8. Decorate the card creatively using colours and decorative materials.

Q4. Visit or interact with an electrician in your locality. Conduct an interview with an electrician and gather information about:

1. What safety measures should be followed while handling electricity?
2. What should we do during an electric shock emergency?
3. Why is earthing important in electrical appliances?
4. How can we save electricity at home?
5. What advice would you give to students about electrical safety?

Q5. Answer the following questions:

- (i) How can two things - one sour and one soapy, makes the mixture harmless?
- (ii) What home remedies do people use for ant bites?
- (iii) How soil acidity affects farming and how farmers correct it?
- (iv) Why do we use the term battery for the electric cells that powers a mobile phone?

(v) Why is it important to never touch electrical devices with wet hands, even if the device runs on batteries?

SOCIAL SCIENCE

Instructions

- Submit homework in the first week after vacations.
- Maintain neatness and creativity.
- Do the work in A4 size colourful sheets and compile in a file.
- Use coloured headings and diagrams wherever possible.

Happy Holidays and Happy Learning!

Chapters Included

Geographical Diversity of India

The Rise of Cities and States

Understanding Governments

The Journey from Barter to Money

Section A. Multiple Choice Questions

1. Which mountain range forms the northern boundary of India?

- a) Aravalli
- b) Himalayas
- c) Vindhyas
- d) Satpuras

2. The Thar Desert is located in:

- a) Kerala
- b) Rajasthan
- c) Assam
- d) Odisha

3. Which river is known as the “Ganga of the South”?

- a) Krishna
- b) Godavari
- c) Kaveri
- d) Mahanadi

4. Mahāजनपद means:

- a) Small village
- b) Great kingdom
- c) Temple town
- d) Forest area

5. The first cities developed mainly near:

- a) Mountains
- b) Rivers
- c) Deserts
- d) Plateaus

6. India is a:

- a) Monarchy

- b) Dictatorship
- c) Democracy
- d) Colony

7. Barter system means:

- a) Buying with gold
- b) Exchange of goods for goods
- c) Selling in markets
- d) Use of paper notes

8. RBI stands for:

- a) Reserve Bank of India
- b) Rural Bank of India
- c) Royal Bank of India
- d) Reserve Bureau of India

9. Which physical division of India is known for dense forests and heavy rainfall?

- a) Northern Plains
- b) Desert Region
- c) North-Eastern Hills
- d) Coastal Plains

10. Which body makes laws in a democracy?

- a) Army
- b) Parliament
- c) Police
- d) Courts

B. Write True or False.

1. India has only one type of climate.
2. The Himalayas protect India from cold winds.
3. Mahajanapadas were small families.
4. Governments provide public services.
5. Democracy means rule by the people.
6. Elections are important in a democracy.
7. Barter system always worked smoothly.
8. Coins were heavier than paper currency.
9. The Northern Plains are very fertile.
10. Ancient cities developed due to trade and agriculture.

C. Fill in the Blanks.

1. The _____ Mountains lie in northern India.
2. The _____ Desert is found in Rajasthan.
3. The early kingdoms were called _____.
4. The capital of Magadha was _____.
5. India follows a _____ form of government.
6. The people elect their _____.
7. In the barter system, goods were exchanged for _____.
8. Coins are usually made of _____.
9. Heavy rainfall is common in the _____ region of India.
10. Ancient cities grew near rivers because land was _____.

D. Short Question Answers

1. Name the major physical divisions of India.
2. Why are the Northern Plains fertile?
3. What is a Mahajanapada?
4. Why did ancient cities grow near rivers?
5. What are the functions of a government?
6. What is democracy?
7. What is the role of elections?
8. What is the barter system?
9. Mention one problem of barter system.
10. Why was money introduced?

E. Long Question Answers.

1. Explain the geographical diversity of India. Describe the different physical features and climates found in the country using maps.
2. How did agriculture and trade help in the growth of cities and states in ancient India?
3. Describe the different levels of government in India.
4. Describe the barter system. What were its advantages and disadvantages? Why was money introduced?
5. Explain the journey from barter to modern money. Describe the use of coins, paper currency, and banks in today's economy using pictures.

Section F: Make a model (Any 1 pointer)

Model 1 - Physical Map of India

Prepare a three-dimensional map of India showing the major physical divisions such as mountains, plains, plateaus, deserts, coastal regions, and islands. Use different colours and labels to highlight each landform clearly. Students should also mark important rivers and mountain ranges to show the geographical diversity of the country.

Model 2 - Ancient Indian City Diorama

Create a miniature model of an ancient Indian city showing important features such as houses, markets, roads, forts, palaces, temples, and water bodies. The model should reflect how early cities were planned and how people lived during ancient times. Proper labels and brief descriptions should be added for better understanding.

Model 3 - Structure of Government in India

Prepare a working or display model showing the three levels of government in India — Local, State, and Central Government. The model should explain the functions and responsibilities of each level through diagrams, arrows, pictures, or movable parts. Students may also include important institutions like Parliament, Panchayat, and Municipal Corporation.

Model 4 - Evolution of Trade and Currency

Create a timeline or display model showing the journey from the barter system to modern forms of money. The model should include stages such as barter exchange, metal coins, paper currency, banking system, and digital payments. Students should explain how trade methods changed over time and why money became important in daily life.

MATHEMATICS

Q1. Write Autobiography of any one great Indian Mathematician.

Q2. Make a Working model based on Fraction & Decimal

Q3. **Brain Teasers**

(a)


Can you Solve this?

IF

$3+2=4$
 $2+1=1$
 $4+2=10$
 $5+3=17$

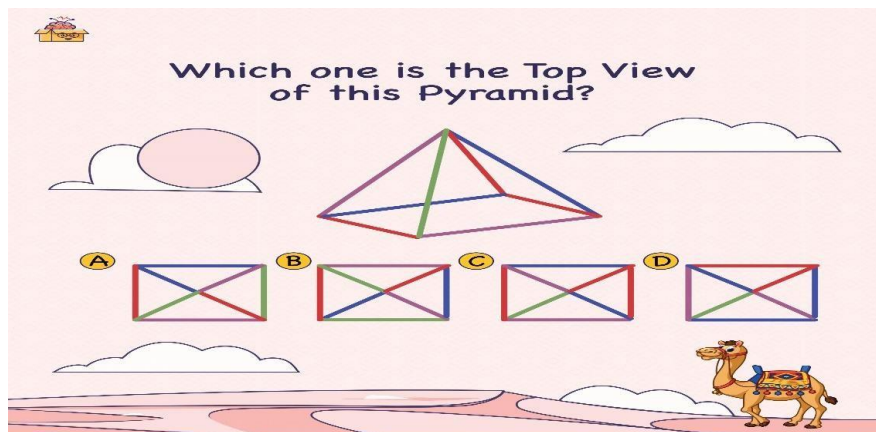
THEN

$6+1=?$



Share if you found!

(b)



Q4. Learn and write tables from 2 to 20, cubes and squares of numbers from 2 to 25 everyday.

(Do it on thin a notebook)

Q5: Revise the syllabus of Periodic Assessment-I (PA-I)

[**Chapter 1:** Large number around us \$ **Chapter 2:** Arithmetic Expression]

Q6: Solve the given worksheets of Chapter 1- Large number around us & Chapter 2- Arithmetic expressions in

Your maths notebook

CHAPTER -1 LARGE NUMBER AROUND US

MCQ

Q1. 5 million is equal to how many lakhs?

(a) 500 lakh (b) 5 lakh (c) 50 lakh (d) 25 lakh

Q2. Which of the following is correctly expressed in International system?

(a) 75,00,000 (b) 7,500,000 (c) 750,00,00 (d) 7,50,00,000

Q3. 1,23,45,678 is read in Indian system as:

(a) 1 crore 23 lakh 45 thousand 678 (b) 12 crore 34 lakh 56 thousand 78 (c) 1 crore 2 lakh 3 thousand 4 hundred (d) 123 million 456 thousand 78

Q4. In International system, commas are placed after every:

(a) 2 digits (b) 4 digits (c) 3 digits (d) 5 digits

Q5. A football stadium can seat approximately 68,000 people. The nearest thousand is:

(a) 60,000 (b) 68,000 (c) 70,000 (d) 1,00,000

Q6. If a farmer produces 1,00,000 kg of rice per month, in 12 months he produces:

(a) 1 crore kg (b) 12 lakh kg (c) 10 lakh kg (d) 15 lakh kg

Q7. Which number is larger?

(a) 50 million (b) 5 crore (c) Both are equal (d) 1 billion

Q8. Write 4,36,21,015 in words using Indian system.

Q9. Round 92,58,000 to nearest crore.

Q10. Write the difference and express in words: (a) 8 crore – 3 crore 70 lakh. (b) Use Indian system.

Q11. Convert: (a) 9.8 crore into millions (b) 145 million into crore.

Q12. Estimate: $2,39,485 + 6,71,832$ by rounding each to nearest lakh.

Q13. Write the numbers and Arrange the following in descending order:

3 crore 15 lakh, 98 lakh 60 thousand, 5 crore 8 lakh, 9 crore 3 lakh.

Q14. The population of City A is 37,45,280 and City B is 1,02,95,800. A new survey predicts that the population of City A will increase by 8,45,000 in the next 5 years, and City B's population will rise by 5,00,000 in the same period.

(a) Estimate and find the future population of both cities.

(b) Compare their future populations using $<$, $>$ or $=$.

(c) Round off the future population of both cities to the nearest lakh.

CHAPTER 2: ARITHMETIC EXPRESSION

Q1. Evaluate: $(25 + 15 \div 3) \times 2$

(a) 40 (b) 50 (c) 60 (d) 70

Q2. Simplify: $64 \div 8 + 7 \times 4$

- (a) 36 (b) 38 (c) 40 (d) 42

Q3. Calculate: $100 - (7 \times 9) + 13$

- (a) 46 (b) 50 (c) 54 (d) 58

Q4. Evaluate: $5 \times (9 - 4) + 3 \times (8 - 5)$

- (a) 34 (b) 35 (c) 37 (d) 38

Q5. Which expression equals $8 \times 6 - (24 \div 3)$?

- (a) $48 - 8$ (b) $8 \times (6 - 3)$ (c) $(8 \times 6) \div 3$ (d) $8 \times 6 - 3 \times 8$

Q6. Simplify: $225 \div (15 \times 3) + 92$

- (a) 86 (b) 87 (c) 88 (d) 89

Q7. (a) Evaluate: $(90 \div 9) + 8 \times (6 - 3)$

(b) Find the value: $(20 \times 5) - (80 \div 8) + 15$

Q8. Arrange in increasing order: $42 \div 7$, 6×8 , $75 - 60$, $13 + 17$, $33 + 2$

Q9. Simplify: $182 \div (9 \times 6) + 25 - 10$

Q10. The sum of 85 and 39 is multiplied by 4, and then 96 is added. Write the expression and evaluate.

Q11. A shopkeeper sells 8 kg of rice at ₹55 per kg and 6 kg of sugar at ₹42 per kg. Write an expression for the total amount and find its value.

Q12. Evaluate: $1000 - [(84 - 36) \div 4 + 9 \times (15 - 8)]$

Q13. A basket contains 12 apples costing ₹15 each, 8 oranges costing ₹12 each, and 6 mangoes costing ₹25 each. Write an expression for total cost and find it.

Q14. A group of 15 friends is going for a picnic. They decide to buy: Sandwiches: 2 each at ₹45 each Juice boxes: 1 each at ₹30 Chips packets: 3 for every 2 people, at ₹25 each packet.
(a) Write the expression for total cost. (b) Calculate the total amount. (c) If each friend contributes equally, how much will each person pay?

Q15. Assertion (A): In $14 + 20 \div 5$, division is done before addition.

Reason (R): Division and multiplication have higher precedence than addition and subtraction.

हिंदी

1. ऑपरेशन सिंदूर को सफल बनाने वाली सैन्य अधिकारी कर्नल सोफिया कुरैशी तथा विंग कमांडर व्योमिक सिंह का चित्र चिपक कर उनके बारे में लिखिए।
2. समय प्रबंधन से संबंधित पाँच दोहे या पाँच सुविचार लिखिए (पृष्ठ संख्या 55 पर दिया गया चित्र बनाइए।)
3. आप अपनी कल्पना से अपने रोबोट का चित्र बनाइए उसे रॉबोट को अपनी पसंद का नाम देते हुए उसके कार्य भी लिखिए।
4. वर्तमान समय में बहुत-से पशु-पक्षी लुप्त हो रहे हैं। लुप्त हो रहे पशु पक्षियों की चित्र सहित सूची बनाइए।
5. सामयिक परीक्षा का पाठ्यक्रम याद कीजिए।

6. निम्नलिखित विषयों पर अनुच्छेद व्याकरण कॉपी में लिखिए।

- (क) क्या होता अगर नदियाँ न होती (पृष्ठ संख्या-287)
(ख) देश प्रेम (पृष्ठ संख्या -286)

7. पढ़ाए गए पाठों को याद कीजिए।

8. शेष (बचा हुआ) कार्य को पूरा करें।

निम्न कार्य पत्रिका को व्याकरण कॉपी में कीजिए।

(व्याकरण)

प्रश्न 1 निम्नलिखित प्रश्नों के उत्तर दीजिए।

क) भाषा से आप क्या समझते हैं?

ख) मौखिक भाषा के कुछ उदाहरण लिखिए?

ग) कौन सा शास्त्र भाषा के शुद्ध रूप का ज्ञान देता है?

घ) देश के अधिकतर निवासियों द्वारा बोली जाने वाली भाषा को क्या कहा जाता है?

प्रश्न 2 निम्नलिखित रिक्त स्थानों को भरिए।

क) भाषा के क्षेत्रीय रूप को ----- कहते हैं।

ख) हिंदी को ----- उप भाषाओं वर्गों में बाँटा गया है।

ग) 14 सितंबर को ----- मनाया जाता है।

घ) मलयालम भाषा की लिपि को ----- नाम से भी जाना जाता है।

प्रश्न 3. सही कथन के आगे सही तथा गलत कथन के आगे का चिन्ह लगाएँ।

क) जो भाषा बच्चा अपने माता-पिता व परिवार से सीखता है, उसे मातृभाषा कहा जाता है।

ख) उर्दू की फारसी लिपि बाएँ से दाएँ ओर लिखी जाती है ।

ग) प्रतिवर्ष 10 जनवरी को विश्व हिंदी दिवस मनाया जाता है।

घ) अवधी, ब्रज भाषा, मैथिली आदि हिंदी की उपभाषा हैं।

संस्कृतम

प्रश्न 1 देव , निशा, कवि,मातृ, धेनुः, अस्मद् शब्द रूप लिखिए तथा याद कीजिए ।

प्रश्न- 2 गम् , पा (पिब्) , स्मृ , पत् , भू धातु रूप (लट् , लृट् , लङ्ग , लोट्) चारों लकार में लिखिए तथा याद कीजिए।

प्रश्न-3- 1-50 तक संख्या लिखिए तथा याद कीजिए।

प्रश्न-4 -माता सरस्वती पर पाँच श्लोक अनुवाद सहित कीजिए।

प्रश्न-5 पाठ्य पुस्तक के पाठ 1से 3 तक याद कीजिए।

प्रश्न-6 व्याकरण में कराए गए कार्य की पुनरावृत्ति कीजिए।

*नोट : सभी प्रश्न उत्तर पुस्तिका (Notebook) में कीजिए ।

FRENCH

Project Activities

a) Write all the articles on A4 size sheet and explain their usage rules

b) Make a beautiful Father's Day card using french sentences.

c) Read and Revise, All the chapters that we have done so far in the class.

d) Cover your French notebook with a "Blue" coloured chart/handmade sheet/pastel sheet and

paste pics on it related to French culture.

Worksheet

Revise Leçon 1 et 2

Q1 Trouvez le(s) sujet (s) et donnez l'infinifit du verbe.

1. consulte un dictionnaire (.....)
2. parles avec mon ami (.....)
3. voyageons dans l'avion(.....)
4. rangez votre chambre (.....)
5. Nagent dans la piscine (.....)

Q2 Conjuguez les verbes à la forme négative.

1. Nous (ranger) la chambre
2. Je (colorier) le dessin
3. Vous (téléphoner) aux parents
4. Je (manger) le burger
5. Nicolas..... (regarder) trop la télé

Q3 Mettez au pluriel.(Change into plural)

- 1) Je suis étudiant
- 2) Je voyage en France
- 3) Tu nage bien
- 4) C'est un vieil homme
- 5) Mon ami range le journal
- 6) Elle a un cahier

Q4 Conjuguez les verbes.

- 1) Vouloir
- 2) Avoir
- 3) Être
- 4) Aller
- 5) Pouvoir
- 6) Manger

Q5 Complétez avec à, au, à la, à l' , aux ou à.

1. Il rentre son pays.
2. Je parle Pierre.
3. Je donne des fleurs Dame.
4. Les étudiants vont École.
5. Je veux aller théâtre.

Q6 Complétez avec les verbes : explorer, marcher, pêcher, grimper, bronzer.

1. Il dans la forêt.
2. Nous dans la rivière.
3. Tu à la montagne.
4. Je à la plage.
5. Ils les grottes.

Note: All the questions to be completed in French Notebook

B. Fill in the blanks.

1. _____ button is used to add another column for sorting.
2. The physical arrangement of data in ascending or descending order is called _____

C. Write the use of Custom Sorting.

Ans _____

D. Write the purpose of the following functions.

a) IF ()

Ans _____

b) SUM ()

Ans _____

G.K.

Complete till page no: 9 to 23 in GK book.

ART & CRAFT

Book - Do page no. 7 to 29 in art book

File – Complete your Art file work

